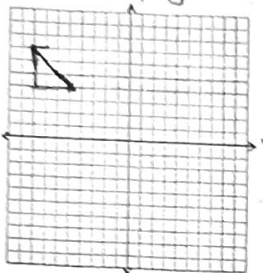
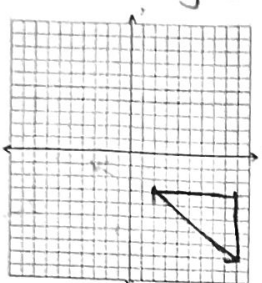


$ai + bj$ Form PracticeWrite each of the following vectors in component form and then in $ai + bj$ form.

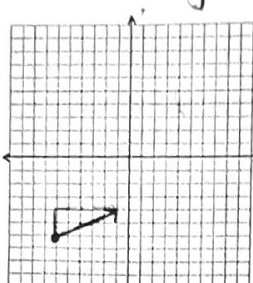
1) $-3i + 3j$



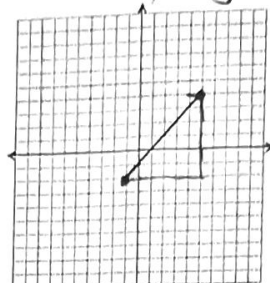
2) $7i - 5j$



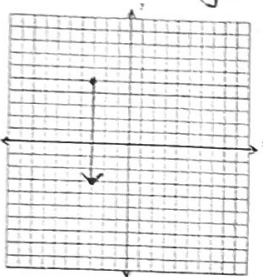
3) $5i + 2j$



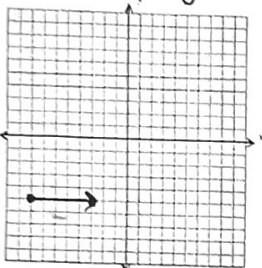
4) $6i + 6j$



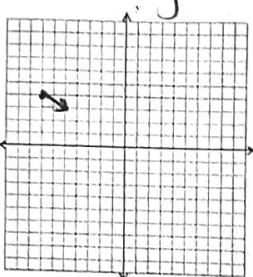
5) $0i + 8j$



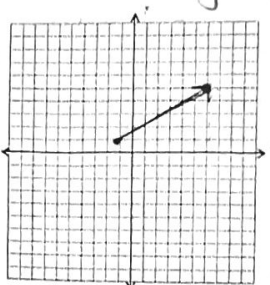
6) $5i + 0j$



7) $2i - j$




8) $7i + 4j$

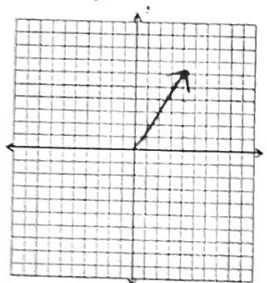


Draw each of the following vectors.

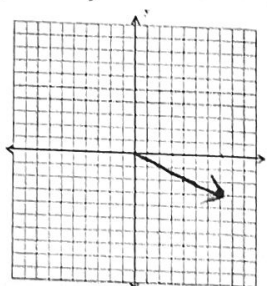
9) $-3i + 2j$



10) $4i + 6j$



11) $7i - 3j$



12) $-6i - 2j$

